


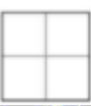
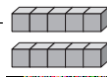





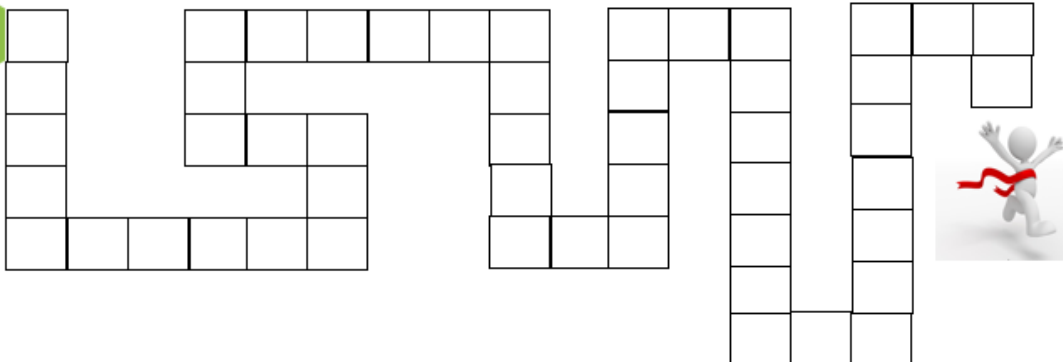
Summer Math Challenge 2019

LEAVING THIRD GRADE

Answer a question every day. Play math games (www.GregTangMath.com) for 20 minutes each day and place one dot in a ten-frame. Try to answer every question and fill every ten-frame before summer ends!

 What time is shown? ____:____	Draw lines to show equal parts: thirds. 	Circle the cube. Put an X on the cylinder. 	Sally needs 300 cards. Jim gives her 10 sets of 12 cards. How many more does she need?	Mr. Smith has 4 cookies on each plate. There are 5 plates. How many cookies are there?
Sonya has 140 beads. How many bags of 10 beads does she need to have 200?	How many equal parts? What is each part called? 	A pizza has 4 slices. 4 friends share the pizza. What fraction does each friend eat?	___ groups of ___ is ___ blocks in all. 	How many angles does this shape have? 
Mia had 48 books. She gave away 17. Write a number sentence to tell how many books she has.	Write the numbers in order from least to greatest: 254 245 258	Write the numbers in order from greatest to least: 586 548 568	Write the number represented by base-10 blocks. 	There are 5 big dogs and 7 small dogs. Write a number sentence to tell how many dogs in all.
Mark pays \$1.80 for a snack. Write 3 ways to make \$1.80.	True or False? 1 centimeter is larger than 1 meter	Write 63 in a different way. ____ tens ____ ones	Sara puts 3 blocks in each tower. How many blocks are in 5 towers?	What is the value of the underlined digit? 8 <u>5</u> 9
What fraction of the circle is shaded? 	Draw pictures to show two different ways to solve $56+24=$	Write the number another way: 79 ____ + ____	Write the number another way: 5 hundreds 3 tens 2 ones	What is the next number in the pattern? 515, 615, 715, ____
Solve: $33+21+14=$ ____	Solve: $96-27=$ ____	Solve: $542+$ ____ $=989$	True or False? $378 < 423 < 456$	Solve: $318+125=$ ____
Write the words for the number: 873	Solve: $125-106=$ ____	How many hundreds are in 698?	Solve: $84-19=$ ____	Write the number: seven hundred forty three
Complete the pattern: 268, 278, 288, ____	Write three numbers with 8 in the hundreds place.	Write the number in a different way: 3 tens 19 ones = ____	Does this show counting by 5s? 67, 72, 77, 81	Write 598 in a different way. ____H ____T ____O
Solve: $23+45+$ ____ $=100$	True or False? $245 > 453$	Solve: $6+$ ____ $+4=14$	Solve: $21+14+35+11=$ ____	How many ones and tens are in 68?
Solve: $352+257=$ ____	Solve: $45+78=$ ____	Solve: $801-$ ____ $=426$	Write the number equal to 28 tens.	Complete the pattern: 740, 745, 750, ____

Visit www.GregTangMath.com to play the following games:



- Coin Bubble
- Satisfaction
- Numskill
- BreakApart
- Espresso
- Kakooma
- NumTanga
- How Much How Many